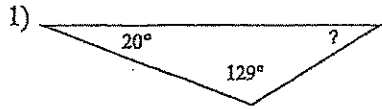


Assignment

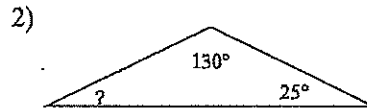
Name _____

Date _____ Period _____

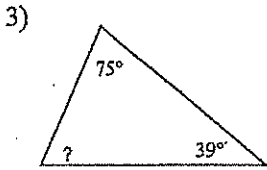
Find the measure of each angle indicated.



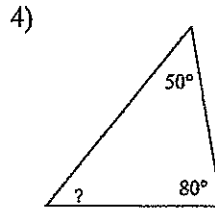
- A) 33°
- B) 136°
- C) 36°
- D) 31°



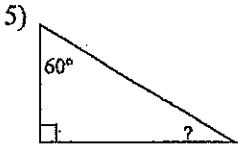
- A) 140°
- B) 21°
- C) 105°
- D) 25°



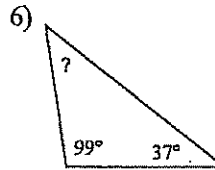
- A) 139°
- B) 66°
- C) 138°
- D) 116°



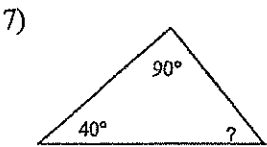
- A) 50°
- B) 35°
- C) 100°
- D) 55°



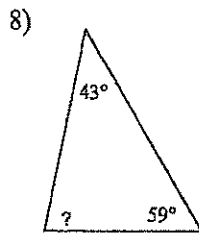
- A) 40°
- B) 33°
- C) 30°
- D) 29°




- A) 155°
- B) 44°
- C) 34°
- D) 54°



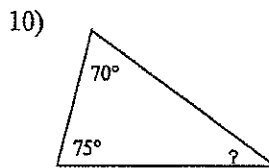
- A) 70°
- B) 58°
- C) 50°
- D) 57°



- A) 131°
- B) 78°
- C) 67°
- D) 143°



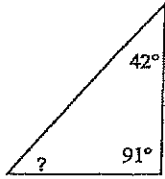
- A) 20°
- B) 26°
- C) 23°
- D) 21°



- A) 105°
- B) 33°
- C) 35°
- D) 26°

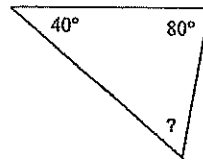


11)



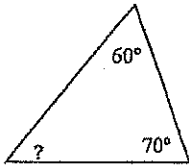
- A) 47° B) 38°
 C) 41° D) 85°

12)



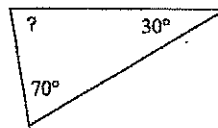
- A) 71° B) 160°
 C) 60° D) 63°

13)



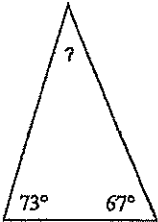
- A) 40° B) 119°
 C) 120° D) 50°

14)



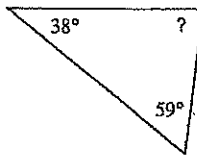
- A) 120° B) 25°
 C) 80° D) 59°

15)



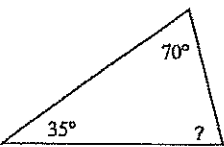
- A) 45° B) 44°
 C) 40° D) 57°

16)



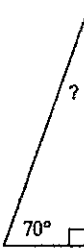
- A) 108° B) 93°
 C) 83° D) 32°

17)



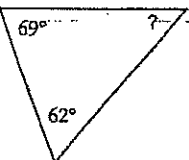
- A) 70° B) 63°
 C) 98° D) 75°

18)



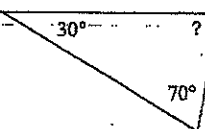
- A) 21° B) 20°
 C) 160° D) 90°

19)



- A) 49° B) 31°
 C) 39° D) 90°

20)



- A) 155° B) 80°
 C) 65° D) 103°

